

Set 1

Day 3

MORNING MEETING VIDEO

SeeSaw

MORNING FITNESS

Complete one of the Super Hero Workouts

LITERACY

Reading

Lexile – Login

Login and read a Lexile. Complete the quiz on that book.

Lightning (cont.) Crazy Creative Challenge

Read the comprehension sheet on lightning from yesterday. Then create a piece of artwork to show what a thunderstorm looks like. Upload your creation when complete. You may complete this on the paper provided.

Look, Cover, Say, Write & Check

Using the sheet provided Monday complete Week 9 the Look, Cover, Say, Write & Check template.

High Frequency Words List 21 : let's, much, Ascot, told, another, great, why, cried, Belmont, room

CRUNCH & SIP

LITERACY

Journal: Students use their journal to write for 10-15mins. Upload picture to Seesaw and file it under Daily Journal.

Topic: If you were in the circus, what role would you have?

Narrative Writing

Narrative Writing Stimulus – “Caught you!”

Children use the stimulus, which includes graphics and prompts, to construct a narrative text with the topic “Caught you!” Children focus on planning their story using the Narrative Planning Template as a scaffold. Today you need to complete just the planning sheet.

LUNCH

MINDFULNESS www.smilingmind.com.au

Please login and create a free account online and track your progress.

NUMERACY

Basic Facts

Complete Mental Maths sheet for the day.

Word Problems

Complete Word Problems 7-9 into your work book. Cut out and glue problem into book and show your working out underneath.

Mathematics Activity

Pandora's Party Palace: Use these problem-solving task cards to work with money in a real-world context. Cut the card out and glue into your book. Answer your questions and show your working out under the question. Draw pictures where needed. Consolidation

Spend half hour on Khan Academy - Early Maths activities mastering concepts.

AFTERNOON RECESS

SCIENCE

Animals

Look at the website <https://www.kids-world-travel-guide.com/animals-in-australia.html>.

Read about the different animals of Australia and choose an animal to write a report about.

Morning Fitness Activities



CAPTAIN AMERICA

NEILA REY WORKOUT neilarey.com



120 steps / 30sec
run on the spot



80 punches



10 knee tuck jumps



20 sit-ups



10 butt-ups



10 raised leg circles



10 push-ups



10 back rotations



20 doorframe rows

level I 3 sets level II 5 sets level III 7 sets rest between sets up to 2 minutes



NEILA REY WORKOUT

neilarey.com

10 sets

or as many as you can do
rest between sets
up to 2 minutes



40 knee to elbow



20 squats



20 climbers



10 planks w/rotations



20 deep lunges



40sec elbow plank



10 sit-ups



20 sitting cross punches



10 push-ups

DEADPOOL

NEILA REY WORKOUT @ neilarey.com



40 side leg raises



40 biceps curls



20 floor taps



10 reverse plank kicks



10 elbow lifts



80 punches



20 plank leg rolls



10 push-ups



10 seagulls

level I 3 sets level II 5 sets level III 7 sets rest between sets up to 2 minutes



10 sets

or as many
as you can do
rest between sets
up to 2 minutes

NEILA REY

WORKOUT

@ neilarey.com



40 high knees



20 fly steps



20 squats



10 push-ups



30sec elbow plank



20 plank arm raises



40 climbers



10sec star plank



10 superman

Superhero Workouts



“Caught you!”

Today you are going to write a narrative (a story).

The topic you have been given for your narrative is “Caught you!”.

Think

What do you want your story to be about? Who has been caught? What were they caught doing? You might write a story about someone caught doing the wrong thing or even a game that was being played between friends.

Plan

Plan your writing before you begin and decide who your characters are, the setting of your story, the complication or problem and how it is solved and how the story will end.


Remember to check ...

- your spelling and punctuation is all correct
- that you have used sentences
- that you have stayed on topic
- that you have edited your writing.



Narrative Planning Template

Title _____

Orientation		
Setting	Characters	Mood
		

↓

Complication

↓



Events and Climax

↓

Resolution

Mental Maths

Wednesday

1. $15 + 11 = \underline{\hspace{2cm}}$
2. $4 - 1 = \underline{\hspace{2cm}}$
3. $4 + 14 = \underline{\hspace{2cm}}$
4. Write the number showing 9 hundreds, 2 tens and 8 ones.
5. Complete this counting pattern:
19, 24, 29, 34, , ,
6. I have 17 match sticks. Tristan has some match sticks too. Together we have 20 match sticks. How many match sticks does Tristan have?
7. In a group of 17 students, 9 would like to play softball and the rest want to play field hockey. How many want to play field hockey?
8. What is the value of this coin?

9. What digital time does the clock show?

10. Draw this shape: square

[illegible]

7. Neil decided to train for cross-country. On the first day of training he ran 3.2 km. On the second day he ran 5.4 km. On the 3rd and 4th day he ran a total of 8.9 km. If he ran 22 km in total after five days of training, how far did he run on the fifth day?



8. There were 93 people on the high-speed train. 23 got off at the first station and 48 got off at the third station. If there are 5 people left on the train at the fourth station, how many got off at the second station?



9. A shop buys skateboards for \$83 and sells them for \$159.95. If they have a sale and sell them for \$20 less, what is the profit on each skateboard sold?



PANDORA'S PARTY PALACE

Snacks


\$5.00

Potato Chips
10 packets per pack



\$3.00

Sultanas
6 boxes per pack



\$5.50

Popcorn
10 packets per pack



Lunch Items

\$4.00

Chicken Nuggets
20 pieces per box



\$8.00

Mini Pizzas
6 pizzas per box



\$20.00

Sushi
20 rolls per pack



Sweet Treats

\$3.50

Chocolate Cupcakes
10 per box



\$6.00

Yoghurt Iceblocks
10 per box



\$2.50

Lollipops
Pack of 12



Drinks

\$2.50

Water
6 x 250 mL bottles



\$11.00

Lemonade
10 x 375 mL bottles



\$5.00

Juice
6 x 250 mL boxes



50% OFF

FOOD

PANDORA'S PARTY PALACE

Decorations

\$2.00

Party Hats
5 hats
per pack



\$2.80

Balloons
20 per pack



\$1.00

Streamers
2 rolls per pack



25% OFF

\$2.40

Bunting
1 x 3 m pack



\$1.60

Party Poppers
10 per pack



\$3.20

Party Blowers
10 per pack



Serving Supplies

\$2.50

Paper Plates
20 plates per pack



\$3.00

Paper Cups
25 cups
per pack



\$1.00

Straws
Box of 50



\$2.00

Plastic Tablecloth
1 per pack



\$1.50

Serviettes
100 per pack



\$4.50

Wet Hand Wipes
100 wipes
per tub



Decorations and Serving Supplies

PANDORA'S PARTY PALACE

Lucy is buying some sweet treats for a party. She needs at least 50 sweet treats, but she doesn't want more than 60.

What combinations of sweet treats could Lucy buy for the party?

List some possibilities.

Calculate the total cost of the sweet treats for Lucy's party.



PANDORA'S PARTY PALACE

Taylor's class was having an end-of-year party. Taylor was asked to bring the drinks. His budget for the drinks was \$20.

What combinations of drinks could Taylor buy for the class party?

List some possibilities.

Check that the drinks don't cost more than \$20.



PANDORA'S PARTY PALACE

Mario is planning a pizza party for his birthday. He needs 24 mini pizzas to feed his friends.

How many boxes of mini pizzas does Mario need to buy?

Calculate the total cost of the mini pizzas for Mario's birthday party.



PANDORA'S PARTY PALACE

Amy's friends came over to her place for a movie night. Amy bought 3 packs of popcorn to share with her friends.

How many snack-size popcorn packets did Amy have at her movie night?

Calculate the total cost of 3 packs of popcorn.

